

Name _____

Add and Subtract Within 100

Find each sum or difference.

$$\begin{array}{r} 1. \quad 28 \\ + 41 \\ \hline \end{array}$$

$$\begin{array}{r} 2. \quad 75 \\ + 4 \\ \hline \end{array}$$

$$\begin{array}{r} 3. \quad 56 \\ + 32 \\ \hline \end{array}$$

$$\begin{array}{r} 4. \quad 60 \\ + 37 \\ \hline \end{array}$$

$$\begin{array}{r} 5. \quad 38 \\ + 55 \\ \hline \end{array}$$

$$\begin{array}{r} 6. \quad 26 \\ + 15 \\ \hline \end{array}$$

$$\begin{array}{r} 7. \quad 9 \\ + 24 \\ \hline \end{array}$$

$$\begin{array}{r} 8. \quad 47 \\ + 27 \\ \hline \end{array}$$

$$\begin{array}{r} 9. \quad 89 \\ - 48 \\ \hline \end{array}$$

$$\begin{array}{r} 10. \quad 43 \\ - 11 \\ \hline \end{array}$$

$$\begin{array}{r} 11. \quad 96 \\ - 32 \\ \hline \end{array}$$

$$\begin{array}{r} 12. \quad 87 \\ - 15 \\ \hline \end{array}$$

$$\begin{array}{r} 13. \quad 76 \\ - 37 \\ \hline \end{array}$$

$$\begin{array}{r} 14. \quad 62 \\ - 5 \\ \hline \end{array}$$

$$\begin{array}{r} 15. \quad 50 \\ - 36 \\ \hline \end{array}$$

$$\begin{array}{r} 16. \quad 63 \\ - 48 \\ \hline \end{array}$$

17. Write the missing number for each equation.

$$58 + 3 \square = 93$$

$$6 \square - 19 = 49$$

$$39 + 45 = 8 \square$$

$$75 - 53 = \square 2$$

$$\square 5 + 10 = 95$$

$$72 - 4 \square = 32$$

Name _____

Add and Subtract Within 100

Find each sum or difference.

1.
$$\begin{array}{r} 63 \\ + 31 \\ \hline \end{array}$$

2.
$$\begin{array}{r} 24 \\ + 55 \\ \hline \end{array}$$

3.
$$\begin{array}{r} 12 \\ + 16 \\ \hline \end{array}$$

4.
$$\begin{array}{r} 26 \\ + 60 \\ \hline \end{array}$$

5.
$$\begin{array}{r} 7 \\ + 57 \\ \hline \end{array}$$

6.
$$\begin{array}{r} 58 \\ + 23 \\ \hline \end{array}$$

7.
$$\begin{array}{r} 16 \\ + 64 \\ \hline \end{array}$$

8.
$$\begin{array}{r} 35 \\ + 37 \\ \hline \end{array}$$

9.
$$\begin{array}{r} 92 \\ - 40 \\ \hline \end{array}$$

10.
$$\begin{array}{r} 76 \\ - 41 \\ \hline \end{array}$$

11.
$$\begin{array}{r} 48 \\ - 33 \\ \hline \end{array}$$

12.
$$\begin{array}{r} 59 \\ - 5 \\ \hline \end{array}$$

13.
$$\begin{array}{r} 62 \\ - 38 \\ \hline \end{array}$$

14.
$$\begin{array}{r} 91 \\ - 19 \\ \hline \end{array}$$

15.
$$\begin{array}{r} 40 \\ - 13 \\ \hline \end{array}$$

16.
$$\begin{array}{r} 73 \\ - 57 \\ \hline \end{array}$$

17. Circle each problem that has a sum or difference of 35.

$43 - 8$

$29 + 6$

$55 - 20$

$18 + 27$

$82 - 37$

$9 + 27$

$48 - 13$

$17 + 18$

$90 - 45$

Name _____

Add and Subtract Within 100

Find each sum or difference.

1.
$$\begin{array}{r} 15 \\ + 50 \\ \hline \end{array}$$

2.
$$\begin{array}{r} 56 \\ + 23 \\ \hline \end{array}$$

3.
$$\begin{array}{r} 27 \\ + 61 \\ \hline \end{array}$$

4.
$$\begin{array}{r} 41 \\ + 15 \\ \hline \end{array}$$

5.
$$\begin{array}{r} 79 \\ + 8 \\ \hline \end{array}$$

6.
$$\begin{array}{r} 16 \\ + 18 \\ \hline \end{array}$$

7.
$$\begin{array}{r} 34 \\ + 57 \\ \hline \end{array}$$

8.
$$\begin{array}{r} 42 \\ + 28 \\ \hline \end{array}$$

9.
$$\begin{array}{r} 87 \\ - 24 \\ \hline \end{array}$$

10.
$$\begin{array}{r} 65 \\ - 54 \\ \hline \end{array}$$

11.
$$\begin{array}{r} 77 \\ - 27 \\ \hline \end{array}$$

12.
$$\begin{array}{r} 53 \\ - 31 \\ \hline \end{array}$$

13.
$$\begin{array}{r} 70 \\ - 37 \\ \hline \end{array}$$

14.
$$\begin{array}{r} 96 \\ - 18 \\ \hline \end{array}$$

15.
$$\begin{array}{r} 47 \\ - 19 \\ \hline \end{array}$$

16.
$$\begin{array}{r} 91 \\ - 43 \\ \hline \end{array}$$

17. Circle each problem that requires regrouping.

$38 - 19$

$42 - 20$

$63 - 34$

$30 - 16$

$78 - 58$

$94 - 71$

$65 - 27$

$90 - 15$

$76 - 5$

Name _____

Add and Subtract Within 100

Find each sum or difference.

1.
$$\begin{array}{r} 72 \\ + 24 \\ \hline \end{array}$$

2.
$$\begin{array}{r} 13 \\ + 26 \\ \hline \end{array}$$

3.
$$\begin{array}{r} 34 \\ + 55 \\ \hline \end{array}$$

4.
$$\begin{array}{r} 50 \\ + 17 \\ \hline \end{array}$$

5.
$$\begin{array}{r} 39 \\ + 11 \\ \hline \end{array}$$

6.
$$\begin{array}{r} 77 \\ + 7 \\ \hline \end{array}$$

7.
$$\begin{array}{r} 54 \\ + 38 \\ \hline \end{array}$$

8.
$$\begin{array}{r} 28 \\ + 46 \\ \hline \end{array}$$

9.
$$\begin{array}{r} 90 \\ - 30 \\ \hline \end{array}$$

10.
$$\begin{array}{r} 85 \\ - 64 \\ \hline \end{array}$$

11.
$$\begin{array}{r} 29 \\ - 27 \\ \hline \end{array}$$

12.
$$\begin{array}{r} 74 \\ - 42 \\ \hline \end{array}$$

13.
$$\begin{array}{r} 54 \\ - 9 \\ \hline \end{array}$$

14.
$$\begin{array}{r} 46 \\ - 18 \\ \hline \end{array}$$

15.
$$\begin{array}{r} 82 \\ - 24 \\ \hline \end{array}$$

16.
$$\begin{array}{r} 98 \\ - 19 \\ \hline \end{array}$$

17. Circle **Yes** or **No** to tell if 23 will make each equation true.

$60 - \square = 27$ Yes No

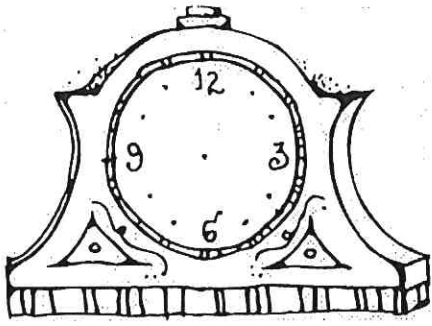
$\square + 50 = 83$ Yes No

$48 + \square = 71$ Yes No

$69 - \square = 46$ Yes No

$\square + 57 = 90$ Yes No


$\square - 19 = 4$ Yes No




Name _____

Clock Time


Directions: Write the time on each clock.




12:00




4:00




1:00




8:00



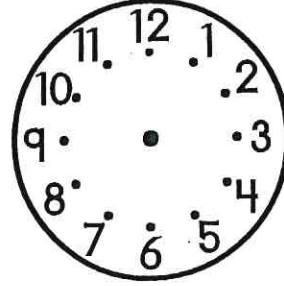
7:00




11:00



2:00




10:00










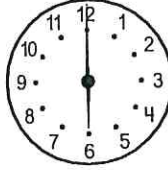




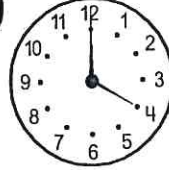

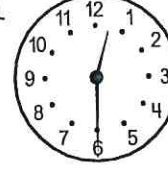








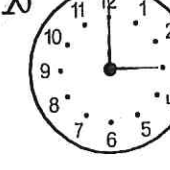
6:00

Name _____

What time is it when you find an elephant in your car?



Solve each box. Use the letters to answer the riddle at the bottom the page.

a  _____	e  _____	i  _____	o  _____	u  _____	y  _____
b  _____	c  _____	d  _____	f  _____	g  _____	h  _____
j  _____	k  _____	l  _____	m  _____	n  _____	p  _____
r  _____	s  _____	t  _____	v  _____	w  _____	x  _____

7:30 1:00 3:30 5:30

7:30 9:00

2:00 5:30 7:30

2:30

8:00 5:30 1:30



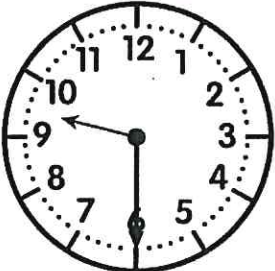


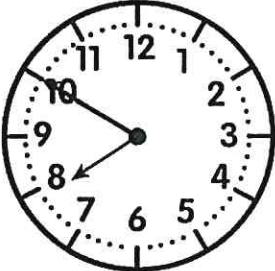










6:00 2:30 7:00

Five Minute Intervals

Name: _____

Directions: Write the time on the line.



 _____	 _____	 _____	 _____
 _____	 _____	 _____	 _____
 _____	 _____	 _____	 _____
 _____	 _____	 _____	 _____

COLOR THE COINS

Name: _____

Penny



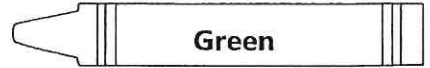
Dime



Nickle







Quarter



















































Name _____ Date _____

Write the name of the coin and its value. *Escribe el nombre de la moneda y su valor.*

 penny 1¢	 nickel 5¢	 dime 10¢	 quarter 25¢
---	--	---	--

Circle the name of the coin and write its value. *Hace un círculo alrededor del nombre de la moneda y escribe su valor.*

 _____ penny nickel dime quarter	 _____ penny nickel dime quarter	 _____ penny nickel dime quarter	 _____ penny nickel dime quarter	 _____ penny nickel dime quarter	 _____ penny nickel dime quarter
 _____ penny nickel dime quarter	 _____ penny nickel dime quarter	 _____ penny nickel dime quarter	 _____ penny nickel dime quarter	 _____ penny nickel dime quarter	 _____ penny nickel dime quarter
 _____ penny nickel dime quarter	 _____ penny nickel dime quarter	 _____ penny nickel dime quarter	 _____ penny nickel dime quarter	 _____ penny nickel dime quarter	 _____ penny nickel dime quarter
 _____ penny nickel dime quarter	 _____ penny nickel dime quarter	 _____ penny nickel dime quarter	 _____ penny nickel dime quarter	 _____ penny nickel dime quarter	 _____ penny nickel dime quarter
 _____ penny nickel dime quarter	 _____ penny nickel dime quarter	 _____ penny nickel dime quarter	 _____ penny nickel dime quarter	 _____ penny nickel dime quarter	 _____ penny nickel dime quarter
 _____ penny nickel dime quarter	 _____ penny nickel dime quarter	 _____ penny nickel dime quarter	 _____ penny nickel dime quarter	 _____ penny nickel dime quarter	 _____ penny nickel dime quarter
 _____ penny nickel dime quarter	 _____ penny nickel dime quarter	 _____ penny nickel dime quarter	 _____ penny nickel dime quarter	 _____ penny nickel dime quarter	 _____ penny nickel dime quarter
 _____ penny nickel dime quarter	 _____ penny nickel dime quarter	 _____ penny nickel dime quarter	 _____ penny nickel dime quarter	 _____ penny nickel dime quarter	 _____ penny nickel dime quarter

Name _____

Subtraction Facts: 0 to 18

A.	$11 - 5 =$	$13 - 4 =$	$10 - 8 =$	$10 - 5 =$	$1 - 1 =$
B.	$7 - 2 =$	$2 - 0 =$	$8 - 3 =$	$4 - 0 =$	$6 - 4 =$
C.	$13 - 7 =$	$10 - 3 =$	$15 - 9 =$	$12 - 4 =$	$11 - 8 =$
D.	$6 - 5 =$	$9 - 6 =$	$5 - 3 =$	$7 - 4 =$	$4 - 3 =$
E.	$14 - 6 =$	$11 - 4 =$	$17 - 8 =$	$12 - 7 =$	$3 - 1 =$
F.	$3 - 3 =$	$6 - 0 =$	$9 - 1 =$	$0 - 0 =$	$8 - 5 =$
G.	$15 - 7 =$	$12 - 3 =$	$10 - 7 =$	$9 - 8 =$	$12 - 9 =$
H.	$9 - 3 =$	$8 - 6 =$	$3 - 0 =$	$7 - 1 =$	$5 - 5 =$
I.	$11 - 9 =$	$16 - 9 =$	$14 - 5 =$	$13 - 6 =$	$11 - 3 =$
J.	$1 - 0 =$	$7 - 3 =$	$5 - 2 =$	$4 - 2 =$	$7 - 6 =$
K.	$12 - 8 =$	$11 - 2 =$	$15 - 6 =$	$10 - 4 =$	$12 - 6 =$
L.	$8 - 4 =$	$4 - 1 =$	$8 - 8 =$	$8 - 2 =$	$2 - 2 =$
M.	$9 - 7 =$	$10 - 2 =$	$14 - 8 =$	$17 - 9 =$	$16 - 8 =$
N.	$6 - 3 =$	$7 - 7 =$	$6 - 2 =$	$5 - 1 =$	$9 - 4 =$
O.	$13 - 5 =$	$16 - 7 =$	$13 - 9 =$	$10 - 1 =$	$14 - 7 =$
P.	$9 - 0 =$	$2 - 1 =$	$9 - 5 =$	$9 - 2 =$	$5 - 0 =$
Q.	$18 - 9 =$	$11 - 7 =$	$10 - 9 =$	$15 - 8 =$	$13 - 8 =$
R.	$5 - 4 =$	$6 - 1 =$	$7 - 0 =$	$4 - 4 =$	$8 - 7 =$
S.	$10 - 6 =$	$14 - 9 =$	$12 - 5 =$	$9 - 9 =$	$11 - 6 =$
T.	$8 - 1 =$	$7 - 5 =$	$3 - 2 =$	$8 - 0 =$	$6 - 6 =$

Minutes

Score

1	2	3	4	5
---	---	---	---	---

--

