


Name : \_\_\_\_\_ Date : \_\_\_\_\_




Counting Backwards (up to 20)


Help me to fill the missing numbers by counting backwards !



1) (20) (19) ( ) (17) ( ) (15)

2)  (16) ( ) ( ) (13) (12) ( )

3) (18) ( ) (16) ( ) ( ) (13)

4) ( ) (14) ( ) (12)  ( ) (10)

20 19 18 17 16 15 14 13 12 11 10