



Spin, Write, Compare

Name: _____

Spin both spinners. Write down the numbers you spun and compare using $>$, $<$, or $=$.





1. _____	<input type="text"/>	_____	2. _____	<input type="text"/>	_____
3. _____	<input type="text"/>	_____	4. _____	<input type="text"/>	_____
5. _____	<input type="text"/>	_____	6. _____	<input type="text"/>	_____
7. _____	<input type="text"/>	_____	8. _____	<input type="text"/>	_____
9. _____	<input type="text"/>	_____	10. _____	<input type="text"/>	_____
11. _____	<input type="text"/>	_____	12. _____	<input type="text"/>	_____
13. _____	<input type="text"/>	_____	14. _____	<input type="text"/>	_____

Spin, Write, Compare

Name: _____

Spin both spinners. Write down the numbers you spun and compare using $>$, $<$, or $=$.



1. _____	<input type="text"/>	_____	2. _____	<input type="text"/>	_____
3. _____	<input type="text"/>	_____	4. _____	<input type="text"/>	_____
5. _____	<input type="text"/>	_____	6. _____	<input type="text"/>	_____
7. _____	<input type="text"/>	_____	8. _____	<input type="text"/>	_____
9. _____	<input type="text"/>	_____	10. _____	<input type="text"/>	_____
11. _____	<input type="text"/>	_____	12. _____	<input type="text"/>	_____
13. _____	<input type="text"/>	_____	14. _____	<input type="text"/>	_____