


1. There are 132 new paint brushes and 67 old paint brushes.

How many elves can paint altogether?

- A. 199
- B. 65
- C. 109



2. There were 73 deer playing in the snowy field yesterday. Today there are only 52 deer in the field. How many more deer were there yesterday?

- A. 125
- B. 21
- C. 121




5. Roy the Elf is brushing 29 reindeer in the barn. Joy the Elf is washing 31 reindeer. Ten other elves are cleaning out the stalls. How many reindeer in all?

A. 50

B. 60

C. 70



6. There are 14 red and 22 green gifts under the Christmas tree. Santa puts 43 purple and silver gifts under the tree when he comes. How many presents altogether?


A. 79

B. 78

C. 69



11. The elves are busy getting Santa's sleigh ready. It takes 57 elves to put all of the bells on the sleigh. There are only 23 elves. How many more elves are needed to put the bells on the sleigh?



A. 80 B. 34 C. 44


12. Mrs. Claus knitted Santa 10 pair of red socks and 20 pair of green socks to keep his feet warm. ~~She also knitted 10 pair of striped socks.~~ How many red and green socks did Mrs. Claus make for Santa?

A. 30 B. 60 C. 80




17. The elves are playing with the reindeer in the field. There are 57 elves and 44 deer. How many more players do they need to have 200 players total?


- A. 101
- B. 100
- C. 99



18. ⁽⁶³⁾Sixty three reindeer were running in the meadow. It began snowing very hard. Santa went to find the reindeer and only ⁽¹²⁾saw twelve. How many more reindeer are missing?


- A. 51
- B. 49
- C. 50





19. Santa needs more help wrapping presents. He has 520 elves wrapping right now. How many more elves does he need to have a total of 750 elves?

- A. 65
- B. 45
- C. 73



20. There were 59 presents under the Skunk family's tree. Little Jim Bob Skunk snuck in and opened all but 14 presents. How many did he open?

